

# A ÁRVORE

OBSERVE A HISTÓRIA EM QUADRINHOS EM TODOS OS DETALHES.



DE ACORDO COM AS CENAS DA HISTÓRIA, RESPONDA:

A) CRIE UM NOME PARA O PERSONAGEM.

B) O QUE O MENINO ESTÁ FAZENDO?

C) O QUE ACONTECEU ALGUNS MESES DEPOIS?



















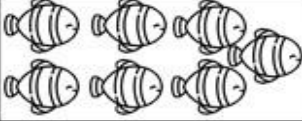
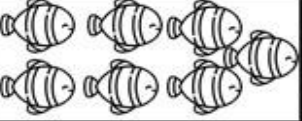
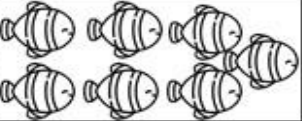









D) O QUE VOCÊ ACHA QUE O MENINO VAI FAZER COM O MILHO?

NOME \_\_\_\_\_

DATA \_\_\_\_/\_\_\_\_/\_\_\_\_



# TABUADA ILUSTRADA









































			$3 \times 0 =$
			$3 \times 1 =$
			$3 \times 2 =$
			$3 \times 3 =$
			$3 \times 4 =$
			$3 \times 5 =$
			$3 \times 6 =$
			$3 \times 7 =$
			$3 \times 8 =$
			$3 \times 9 =$
			$3 \times 10 =$

NOME \_\_\_\_\_

DATA \_\_\_\_/\_\_\_\_/\_\_\_\_



# TABUADA ILUSTRADA

				$4 \times 0 =$
				$4 \times 1 =$
				$4 \times 2 =$
				$4 \times 3 =$
				$4 \times 4 =$
				$4 \times 5 =$
				$4 \times 6 =$
				$4 \times 7 =$
				$4 \times 8 =$
				$4 \times 9 =$
				$4 \times 10 =$














































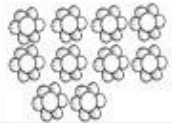
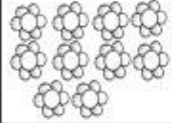
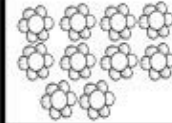
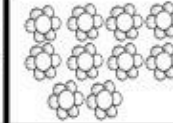



NOME \_\_\_\_\_

DATA \_\_\_/\_\_\_/\_\_\_



# TABUADA ILUSTRADA

					$5 \times 0 =$
					$5 \times 1 =$
					$5 \times 2 =$
					$5 \times 3 =$
					$5 \times 4 =$
					$5 \times 5 =$
					$5 \times 6 =$
					$5 \times 7 =$
					$5 \times 8 =$
					$5 \times 9 =$
					$5 \times 10 =$